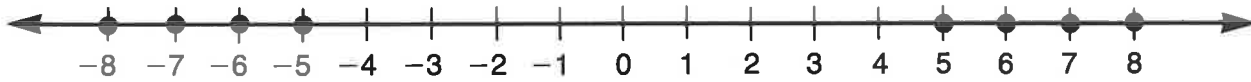
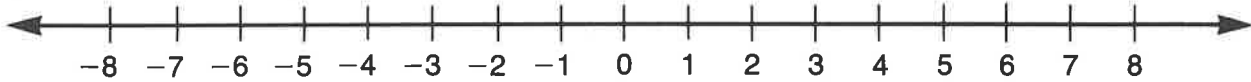


Graph each set of integers.

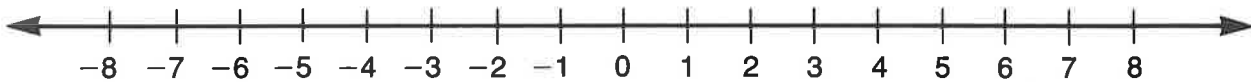
1. $\{x: |x| > 4\}$



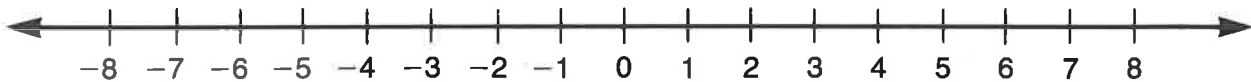
2. $\{x: |x| \leq 3\}$



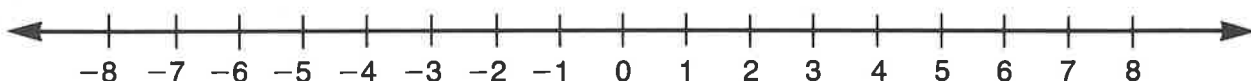
3. $\{x: |x| > 1\}$



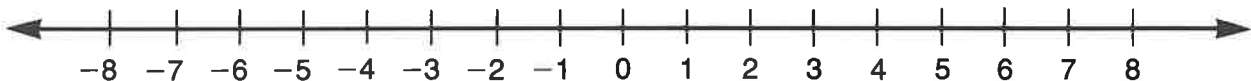
4. $\{x: |x| > 6\}$



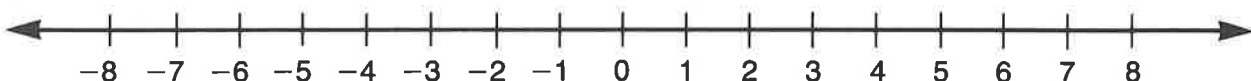
5. $\{x: |x| > 0\}$



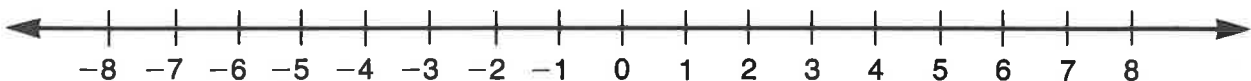
6. $\{x: |x| < 0\}$



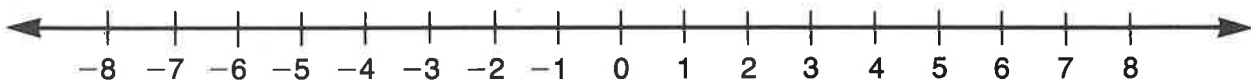
7. $\{x: |x| \leq 5\}$



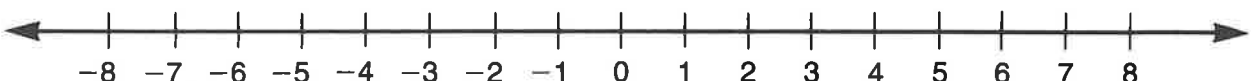
8. $\{x: |x| < -2\}$



9. $\{x: |x| \leq 1\}$



10. $\{x: |x| > 3\}$

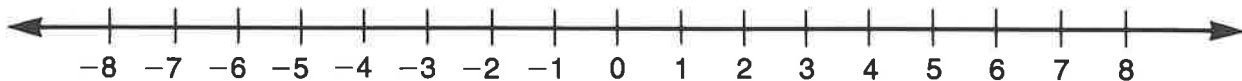


Graph each set of integers.

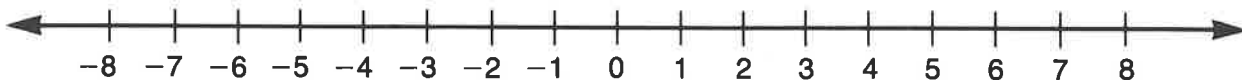
1. $\{x: |x| \leq 2\}$



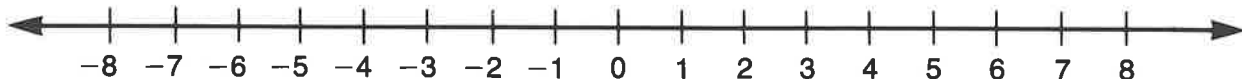
2. $\{x: |x| \geq 4\}$



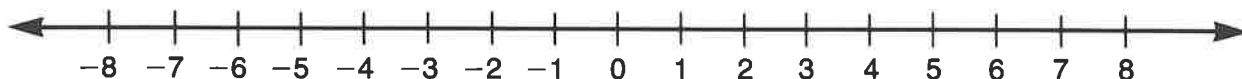
3. $\{x: |x| < -3\}$



4. $\{x: |x| \leq 1\}$



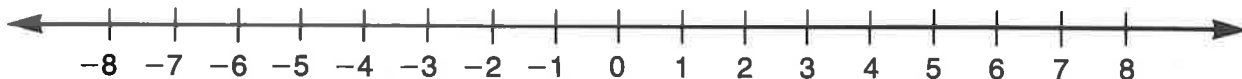
5. $\{x: |x| < 7\}$



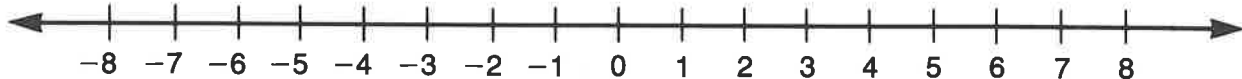
6. $\{x: |x| > 5\}$



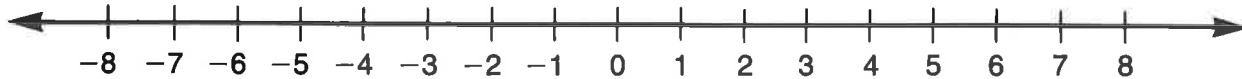
7. $\{x: |x| < 3\}$



8. $\{x: |x| < 4\}$



9. $\{x: |x| \geq 0\}$



10. $\{x: |x| \geq 2\}$

