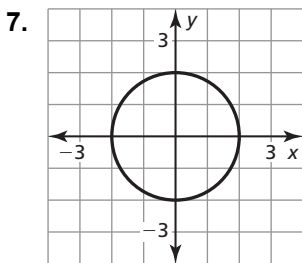
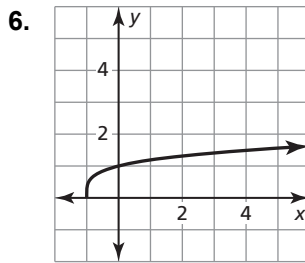
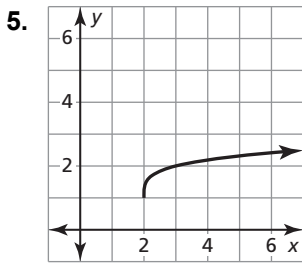
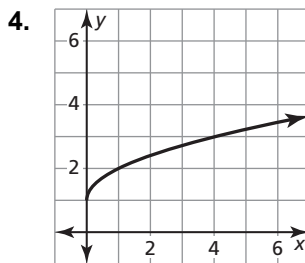
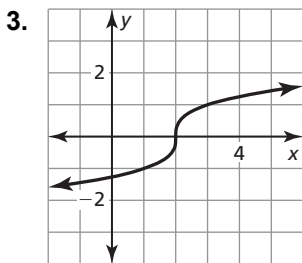
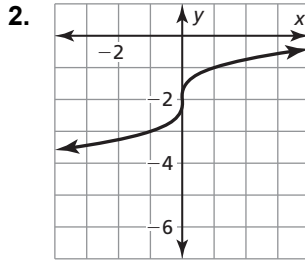
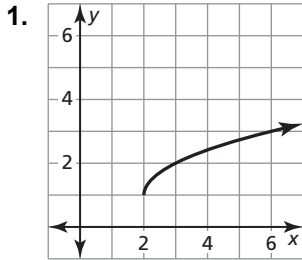


5.3 Puzzle Time

What Has Lots Of Eyes But Can't See?

Write the letter of each answer in the box containing the exercise number.

Match the graph with its function or equation.



Answers

- O. $f(x) = \sqrt[3]{x - 2}$
- A. $f(x) = \sqrt{x - 2} + 1$
- T. $f(x) = x^{1/2} + 1$
- A. $f(x) = \sqrt[4]{x - 2} + 1$
- O. $x^2 + y^2 = 4$
- T. $f(x) = (x + 1)^{1/4}$
- P. $f(x) = x^{1/3} - 2$

1	2	3	4	5	6	7
---	---	---	---	---	---	---